
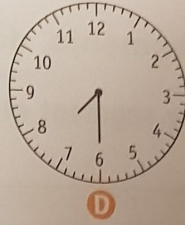



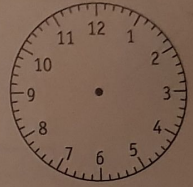
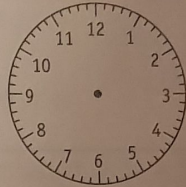
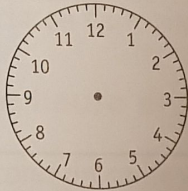
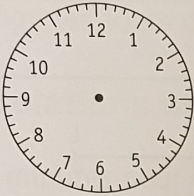



3 Écris l'heure indiquée par chaque horloge.



4 Dessine les aiguilles pour indiquer l'heure demandée.



a 7 h

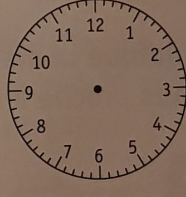
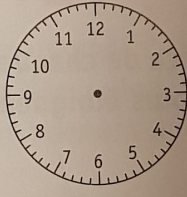


b 11 h

c 10 h

d 9 h

e 3 h

5 Dessine les aiguilles pour indiquer l'heure demandée.




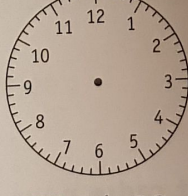

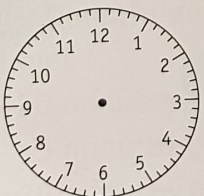
a 3 h 30

b 2 h 30

c 5 h 30

d 4 h 30

6 Dessine les aiguilles pour indiquer l'heure demandée.



a 0 h 30

b 1 h 30

c 6 h 30

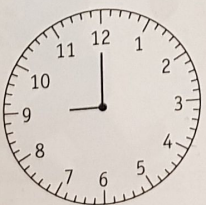
d 11 h 30




7 Dessine les aiguilles pour indiquer l'heure à laquelle se termine le cours de chaque enfant.

a Le cours de judo de Paul dure 1 h.

Début



Fin



b Le cours de dessin de Sonia dure 30 min.

Début



Fin

