


3..2...1...0






Les nombres de 0 à 5

5

cinq



Ecris le nombre indiqué par chaque face du dé.



Colorie le nombre de cases.

4



3



5





1










2



 Comptes le nombre de fruits.



 Utilise les jetons et calcule les additions.

$$\bigcirc + \bullet = \underline{\quad}$$

$$\bigcirc\bigcirc + \bullet = \underline{\quad}$$

$$\bigcirc\bigcirc\bigcirc + \bullet = \underline{\quad}$$

$$\bigcirc\bigcirc + \bullet\bullet = \underline{\quad}$$

$$\bigcirc\bigcirc\bigcirc + \bullet\bullet = \underline{\quad}$$